


Student Work

TEAC 308/808

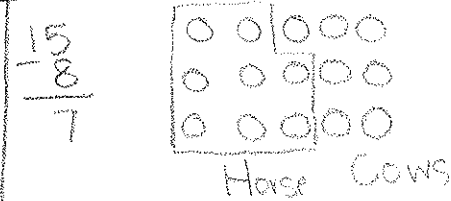
1. Ella picks 4 red apples and some green apples. She picks 13 apples. How many green apples did she pick?

9 green apples
LABEL



2. There are 15 animals in a field. 8 of them are horses. The rest are cows. How many cows are in the field?

7 cows
LABEL




3. Jose has some balloons. Jada gives him 5 more balloons. Now Jose has 12 balloons. How many balloons did Jose have at the beginning?

7 balloons
LABEL




4. Andre has 14 baseball cards. Colin has 11 baseball cards. How many more baseball cards does Andre have?

3 more baseball cards
LABEL




5. There are 6 chocolate chip cookies on a plate and 5 sugar cookies. How many cookies are on the plate?

11 cookies
LABEL



6. Lulu has 17 bananas. She shares 12 bananas with her friends. How many bananas does Lulu have now?

5 bananas
LABEL



My work

Student

Solve get 9 but add it back to 13

$$\begin{array}{r} 13 \\ - 4 \\ \hline 9 \end{array}$$

1. Ella picks 4 red apples and some green apples. She picks 13 apples. How many green apples did she pick?

$$\begin{array}{r} 13 \\ + 4 \\ \hline 17 \end{array}$$

22

9 green apples
LABEL

$$\begin{array}{r} 15 \\ - 8 \\ \hline 7 \end{array}$$

2. There are 15 animals in a field. 8 of them are horses. The rest are cows. How many cows are in the field?

$$\begin{array}{r} 15 \\ - 8 \\ \hline 7 \end{array}$$

7 cows
LABEL

$$\begin{array}{r} 12 \\ - 5 \\ \hline 7 \end{array}$$

3. Jose has some balloons. Jada gives him 5 more balloons. Now Jose has 12 balloons. How many balloons did Jose have at the beginning?

0 balloons
17 balloons - 12 = 5

7 balloons
LABEL

$$\begin{array}{r} 14 \\ - 11 \\ \hline 3 \end{array}$$

4. Andre has 14 baseball cards. Colin has 11 baseball cards. How many more baseball cards does Andre have?

$$\begin{array}{r} 14 \\ + 11 \\ \hline 25 \end{array} \quad \begin{array}{r} 11 \\ - 14 \\ \hline 3 \end{array}$$

3 more baseball cards
LABEL

$$\begin{array}{r} 6 \\ + 5 \\ \hline 11 \end{array}$$

5. There are 6 chocolate chip cookies on a plate and 5 sugar cookies. How many cookies are on the plate?

11 cookies
LABEL

$$\begin{array}{r} 17 \\ - 12 \\ \hline 5 \end{array}$$


6. Lulu has 17 bananas. She shares 12 bananas with her friends. How many bananas does Lulu have now?

5 bananas
LABEL

$$\begin{array}{r} 13 \\ -4 \\ \hline 9 \end{array}$$

1. Ella picks 4 red apples and some green apples. She picks 13 apples. How many green apples did she pick?

9 green apples
LABEL



$$\square + 8 = 15$$

2. There are 15 animals in a field. 8 of them are horses. The rest are cows. How many cows are in the field?

7 cows
LABEL

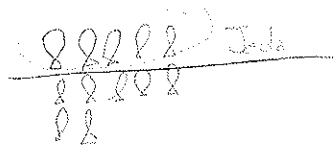


$$\begin{array}{r} 15 \\ -8 \\ \hline 7 \end{array}$$

$$\square + 5 = 12$$

3. Jose has some balloons. Jada gives him 5 more balloons. Now Jose has 12 balloons. How many balloons did Jose have at the beginning?

7 balloons
LABEL




$$\begin{array}{r} 12 \\ -5 \\ \hline 7 \end{array}$$

$$14 - 11 = 3$$

4. Andre has 14 baseball cards. Colin has 11 baseball cards. How many more baseball cards does Andre have?

3 baseball cards
LABEL




$$\begin{array}{r} 14 \\ -11 \\ \hline 3 \end{array}$$

$$6 + 5 = 11$$

5. There are 6 chocolate chip cookies on a plate and 5 sugar cookies. How many cookies are on the plate?

11 cookies
LABEL





$$\begin{array}{r} 6 \\ +5 \\ \hline 11 \end{array}$$

6. Lulu has 17 bananas. She shares 12 bananas with her friends. How many bananas does Lulu have now?

5 bananas
LABEL

$$17 - 12 = \square$$

$$\begin{array}{r} 17 \\ -12 \\ \hline 5 \end{array}$$



1. Ella picks 4 red apples and some green apples. She picks 13 apples. How many green apples did she pick?

9 13 - 4 = 9 of green apples
 LABEL

they would try to add.

2. There are 15 animals in a field. 8 of them are horses. The rest are cows. How many cows are in the field?

7 15 - 8 = 7 cows
 LABEL

3. Jose has some balloons. Jada gives him 5 more balloons. Now Jose has 12 balloons. How many balloons did Jose have at the beginning? - like zero

7 12 - 5 = 7 balloons
 LABEL

4. Andre has 14 baseball cards. Colin has 11 baseball cards. How many more baseball cards does Andre have?

3 baseball cards 14 - 11 = 3
 LABEL

missed word $14 + 11 = 25$


5. There are 6 chocolate chip cookies on a plate and 5 sugar cookies. How many cookies are on the plate?

11 cookies 6 + 5 =
 LABEL

$$\begin{array}{r} 6 \\ + 00000 \\ \hline 11 \end{array}$$

6. Lulu has 17 bananas. She shares 12 bananas with her friends. How many bananas does Lulu have now?

5 bananas 17 - 12 = 5
 LABEL



1. Ella picks 4 red apples and some green apples. She picks 13 apples. How many green apples did she pick?

9 green apples
 LABEL



2. There are 15 animals in a field. 8 of them are horses. The rest are cows. How many cows are in the field?


7 cows
 LABEL

$15 - 8 = 7$

caught on

3. Jose has some balloons. Jada gives him 5 more balloons. Now Jose has 12 balloons. How many balloons did Jose have at the beginning?

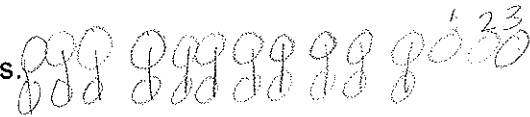
7 balloons
 LABEL



$5 + 5 = 10$
 $12 - 5 = 7$


4. Andre has 14 baseball cards. Colin has 11 baseball cards. How many more baseball cards does Andre have?

3 more baseball cards
 LABEL



5. There are 6 chocolate chip cookies on a plate and 5 sugar cookies. How many cookies are on the plate?

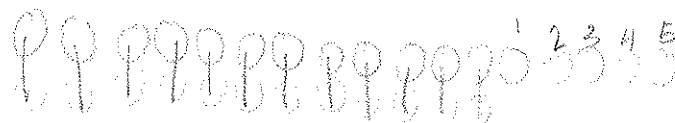
11 cookies
 LABEL



6. Lulu has 17 bananas. She shares 12 bananas with her friends. How many bananas does Lulu have now?

5 bananas
 LABEL

$17 - 12 = 5$



$$4 + \underline{\quad} = 13$$

1. Ella picks 4 red apples and some green apples. She picks 13 apples. How many green apples did she pick?

9 green apples
LABEL

2. There are 15 animals in a field. 8 of them are horses. The rest are cows. How many cows are in the field?

$$\underline{\quad} + 8 = 15$$

7 COWS
LABEL

3. Jose has some balloons. Jada gives him 5 more balloons. Now Jose has 12 balloons. How many balloons did Jose have at the beginning?

$$\underline{\quad} + 5 = 12$$

7 balloons
LABEL

4. Andre has 14 baseball cards. Colin has 11 baseball cards. How many more baseball cards does Andre have?

$$14 - 11 = \underline{\quad}$$

3 baseball cards
LABEL

5. There are 6 chocolate chip cookies on a plate and 5 sugar cookies. How many cookies are on the plate?

$$6 + 5 =$$

11 cookies
LABEL

6. Lulu has 17 bananas. She shares 12 bananas with her friends. How many bananas does Lulu have now?

$$\underline{\quad} + 12 = \underline{17}$$

5 bananas
LABEL

1. Ella picks 4 red apples and some green apples. She picks 13 apples. How many green apples did she pick?

Confused on color of apples

9 green apples
LABEL

13
-4
9
ungrouping

2. There are 15 animals in a field. 8 of them are horses. The rest are cows. How many cows are in the field?

- deciding whether to add or subtract

7 COWS
LABEL

15 - 8 =

3. Jose has some balloons. Jada gives him 5 more balloons. Now Jose has 12 balloons. How many balloons did Jose have at the beginning?

12 - 5 =

7 balloons
LABEL

4. Andre has 14 baseball cards. Colin has 11 baseball cards. How many more baseball cards does Andre have?

14 - 11 =

3 baseball cards
LABEL

5. There are 6 chocolate chip cookies on a plate and 5 sugar cookies. How many cookies are on the plate?

6 + 5 =

11 COOKIES
LABEL

6. Lulu has 17 bananas. She shares 12 bananas with her friends. How many bananas does Lulu have now?

17 - 12 =

5 bananas
LABEL

1. Ella picks 4 red apples and some green apples. She picks 13 apples. How many green apples did she pick?

$$\begin{array}{r} 13 \\ -4 \\ \hline \end{array}$$

9 green apples
LABEL

2. There are 15 animals in a field. 8 of them are horses. The rest are cows. How many cows are in the field?

$$\begin{array}{r} 15 \\ -8 \\ \hline \end{array}$$

7 cows
LABEL

3. Jose has some balloons. Jada gives him 5 more balloons. Now Jose has 12 balloons. How many balloons did Jose have at the beginning?

$$\begin{array}{r} 12 \\ -5 \\ \hline \end{array}$$

7 balloons
LABEL

4. Andre has 14 baseball cards. Colin has 11 baseball cards. How many more baseball cards does Andre have?

$$\begin{array}{r} 14 \\ -11 \\ \hline \end{array}$$

3 more baseball cards
LABEL

5. There are 6 chocolate chip cookies on a plate and 5 sugar cookies. How many cookies are on the plate?

$$\begin{array}{r} 6 \\ +5 \\ \hline \end{array}$$

11 cookies
LABEL

6. Lulu has 17 bananas. She shares 12 bananas with her friends. How many bananas does Lulu have now?

didn't subtract

$$\begin{array}{r} 17 \\ -12 \\ \hline \end{array}$$

5 bananas
LABEL

1. Ella picks 4 red apples and some green apples. She picks 13 apples. How many green apples did she pick?

9 green apples LABEL

13
- 4

0000/0000000000
red green

2. There are 15 animals in a field. 8 of them are horses. The rest are cows. How many cows are in the field?

7 cows LABEL

15
- 8

3. Jose has some balloons. Jada gives him 5 more balloons. Now Jose has 12 balloons. How many balloons did Jose have at the beginning?

7 balloons LABEL

12
- 5

000000|00000000

4. Andre has 14 baseball cards. Colin has 11 baseball cards. How many more baseball cards does Andre have?

3 baseball cards LABEL

14
- 11

14 □□□□□□□□□□□□□□
11 □□□□□□□□□□□□□□

5. There are 6 chocolate chip cookies on a plate and 5 sugar cookies. How many cookies are on the plate?

11 cookies LABEL

6
+ 5

6. Lulu has 17 bananas. She shares 12 bananas with her friends. How many bananas does Lulu have now?

5 bananas LABEL

17
- 12

1. Ella picks 4 red apples and some green apples.
She picks 13 apples. How many green apples did she pick?

apples
LABEL

$4 + 9 = 13$
~~4 + 3 = 7~~
~~7 + 6 = 13~~

2. There are 15 animals in a field. 8 of them are horses.
The rest are cows. How many cows are in the field?

animals
LABEL

$8 + 7 = 15$
 $15 = 8 + 7$

3. Jose has some balloons. Jada gives him 5 more balloons.
Now Jose has 12 balloons. How many balloons did Jose
have at the beginning?

balloons
LABEL

$7 + 5 = 12$
~~5 + 2 = 7~~
~~7 + 5 = 12~~

4. Andre has 14 baseball cards. Colin has 11 baseball cards.
How many more baseball cards does Andre have?

baseball cards
LABEL

$14 - 11 = 3$

A	14
C	11
	3

5. There are 6 chocolate chip cookies on a plate and 5 sugar
cookies. How many cookies are on the plate?

cookies on the plate
LABEL

$6 + 5 = 11$

6	5	11
---	---	----

1. Ella picks 4 red apples and some green apples.
She picks 13 apples. How many green apples did she pick?

apples
LABEL

$4 + 9 = 13$
~~4 + 9 = 13~~
~~4 + 9 = 13~~

2. There are 15 animals in a field. 8 of them are horses.
The rest are cows. How many cows are in the field?

animals
LABEL

$8 + 7 = 15$
 $15 = 8 + 7$

3. Jose has some balloons. Jada gives him 5 more balloons.
Now Jose has 12 balloons. How many balloons did Jose
have at the beginning?

balloons
LABEL

$7 + 5 = 12$
~~5 + 7 = 12~~

4. Andre has 14 baseball cards. Colin has 11 baseball cards.
How many more baseball cards does Andre have?

baseball cards
LABEL

$14 - 11 = 3$
 $14 - 3 = 11$

5. There are 6 chocolate chip cookies on a plate and 5 sugar
cookies. How many cookies are on the plate?

cookies on the plate
LABEL

$6 + 5 = 11$
 $6 + 5 = 11$

1. Ella picks 4 red apples and some green apples. She picks 13 apples. How many green apples did she pick?

9 9 green apples
 LABEL

$$\begin{array}{r} 13 \\ - 4 \\ \hline 9 \end{array}$$

2. There are 15 animals in a field. 8 of them are horses. The rest are cows. How many cows are in the field?

7 7 cows
 LABEL

$$\begin{array}{r} 15 \\ - 8 \\ \hline 7 \end{array}$$

3. Jose has some balloons. Jada gives him 5 more balloons. Now Jose has 12 balloons. How many balloons did Jose have at the beginning?

7 7 balloons
 LABEL

$$\begin{array}{r} ? + 5 = 12 \\ 12 - 5 = 7 \end{array}$$

4. Andre has 14 baseball cards. Colin has 11 baseball cards. How many more baseball cards does Andre have?

3 3 more cards
 LABEL

$$\begin{array}{r} 14 \\ - 11 \\ \hline 3 \end{array}$$

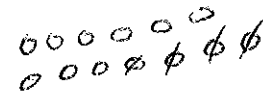
5. There are 6 chocolate chip cookies on a plate and 5 sugar cookies. How many cookies are on the plate?

11 11 cookies
 LABEL

6. Lulu has 17 bananas. She shares 12 bananas with her friends. How many bananas does Lulu have now?

5 5 bananas
 LABEL

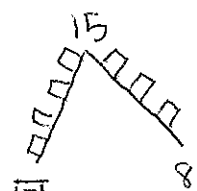
1. Ella picks 4 red apples and some green apples. She picks 13 apples. How many green apples did she pick?



9 green apples
 LABEL

$4 + \boxed{9} = 13$
 $13 - 4 = \square$

2. There are 15 animals in a field. 8 of them are horses. The rest are cows. How many cows are in the field?



7 Cows
 LABEL

$8 + \boxed{7} = 15$

Join/ add to

3. Jose has some balloons. Jada gives him 5 more balloons. Now Jose has 12 balloons. How many balloons did Jose have at the beginning?




7 balloons
 LABEL

$\boxed{7} + 5 = 12$

Compare

4. Andre has 14 baseball cards. Colin has 11 baseball cards. How many more baseball cards does Andre have?



3 baseball cards
 LABEL

$14 - 11 = \boxed{3}$
 $11 + \boxed{3} = 14$

Put together

5. There are 6 chocolate chip cookies on a plate and 5 sugar cookies. How many cookies are on the plate?

$6 + 5 = \boxed{11}$

11 Cookies
 LABEL

Take away

6. Lulu has 17 bananas. She shares 12 bananas with her friends. How many bananas does Lulu have now?

$17 - 12 = \boxed{5}$

5 bananas
 LABEL

13 - 4 = 9



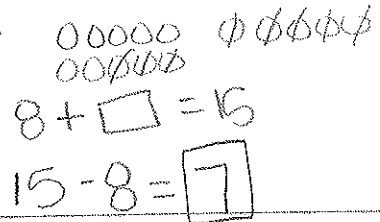
1. Ella picks 4 red apples and some green apples. She picks 13 apples. How many green apples did she pick?

9 green apples
LABEL

13 - 4 =
4 + = 13

2. There are 15 animals in a field. 8 of them are horses. The rest are cows. How many cows are in the field?

7 cows
LABEL



3. Jose has some balloons. Jada gives him 5 more balloons. Now Jose has 12 balloons. How many balloons did Jose have at the beginning?

7 balloons at beginning
LABEL

12 - 5 = 7

4. Andre has 14 baseball cards. Colin has 11 baseball cards. How many more baseball cards does Andre have?

3 more cards than Colin
LABEL

14 - 11

5. There are 6 chocolate chip cookies on a plate and 5 sugar cookies. How many cookies are on the plate?

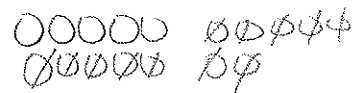
11 cookies
LABEL

6 + 5 = 11



6. Lulu has 17 bananas. She shares 12 bananas with her friends. How many bananas does Lulu have now?

5 bananas
LABEL



17 - 12 = 5

Put together

Take apart

Join/adding

Compare

add/join put together


Take apart or take from

Put together

1. Ella picks 4 red apples and some green apples. She picks 13 apples. How many green apples did she pick?

9 *subtraction.
green apples
 LABEL

$13 - 4 = \square$
 $4 + \square = 13$



Take Apart

2. There are 15 animals in a field. 8 of them are horses. The rest are cows. How many cows are in the field?

7 *subtraction
cows
 LABEL

$15 - 8 = \square$
 $8 + \square = 15$



Add to

3. Jose has some balloons. Jada gives him 5 more balloons. Now Jose has 12 balloons. How many balloons did Jose have at the beginning?

7 *subtraction
balloons
 LABEL

$\square + 5 = 12$
 $12 - 5 = \square$

Compare

4. Andre has 14 baseball cards. Colin has 11 baseball cards. How many more baseball cards does Andre have?

3 *subtraction
baseball cards
 LABEL

$14 - 11 = \square$

Put together / Take Apart

5. There are 6 chocolate chip cookies on a plate and 5 sugar cookies. How many cookies are on the plate?

11 *addition
cookies
 LABEL

$6 + 5 = \square$




Take From

6. Lulu has 17 bananas. She shares 12 bananas with her friends. How many bananas does Lulu have now?

5 *subtraction
bananas
 LABEL

$17 - 12 = \square$






- Put together*
1. Ella picks 4 red apples and some green apples. She picks 13 apples. How many green apples did she pick? $4 + \square = 13$

\square 9 red apples
 LABEL

$13 - 4 = 9$ $13 - 4 = \square$



- Take Apart*
2. There are 15 animals in a field. 8 of them are horses. The rest are cows. How many cows are in the field?

\square 7 cows
 LABEL

$15 - 8 = \square$
 $8 + \square = 15$
 $15 - 8 = 7$

- Add to (join)*
3. Jose has some balloons. Jada gives him 5 more balloons. Now Jose has 12 balloons. How many balloons did Jose have at the beginning?

\square 7 balloons
 LABEL

$12 - 5 = \square$
 $\square + 5 = 12$
 $12 - 5 = 7$

- Compare*
4. Andre has 14 baseball cards. Colin has 11 baseball cards. How many more baseball cards does Andre have?

\square 3 baseball cards
 LABEL

$14 - 11 = \square$
 $\frac{14}{-11}$
 3

- Put together*
5. There are 6 chocolate chip cookies on a plate and 5 sugar cookies. How many cookies are on the plate?

\square 11 cookies
 LABEL

$6 + 5 = \square$
 $6 + 5 = 11$ $\square - 5 = 6$
 $\square - 6 = 5$

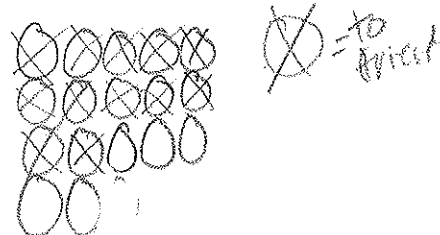


6. Lulu has 17 bananas. She shares 12 bananas with her friends. How many bananas does Lulu have now?

\square 5 bananas
 LABEL

$\frac{17}{-12}$
 5 $17 - 12 = \square$
 $12 + \square = 17$

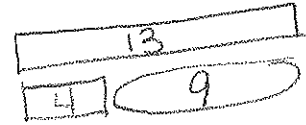
Take Apart



$4 + \boxed{9} = 13$

add to/ join

1. Ella picks 4 red apples and some green apples. She picks 13 apples. How many green apples did she pick?



$\boxed{9}$ apples _____
 LABEL

take apart

2. There are 15 animals in a field. 8 of them are horses. The rest are cows. How many cows are in the field?

$15 - 8 = \boxed{7}$

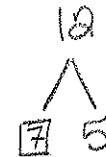


$\boxed{7}$ cows _____
 LABEL

add to join

3. Jose has some balloons. Jada gives him 5 more balloons. Now Jose has 12 balloons. How many balloons did Jose have at the beginning?

$\boxed{7} + 5 = 12$




$\boxed{7}$ balloons _____
 LABEL

compare

4. Andre has 14 baseball cards. Colin has 11 baseball cards. How many more baseball cards does Andre have?

$14 - 11 = \boxed{3}$



$\boxed{3}$ baseball cards _____
 LABEL

put together

5. There are 6 chocolate chip cookies on a plate and 5 sugar cookies. How many cookies are on the plate?

$6 + 5 = \boxed{11}$



$\boxed{11}$ cookies _____
 LABEL

take apart/ take away

6. Lulu has 17 bananas. She shares 12 bananas with her friends. How many bananas does Lulu have now?

$17 - 12 = \boxed{5}$



$\boxed{5}$ bananas _____
 LABEL